



SNS COLLEGE OF TECHNOLOGY

(An Autonomous Institution)

Approved by AICTE, New Delhi, Affiliated to Anna University, Chennai

Accredited by NAAC-UGC with 'A++' Grade (Cycle III) &

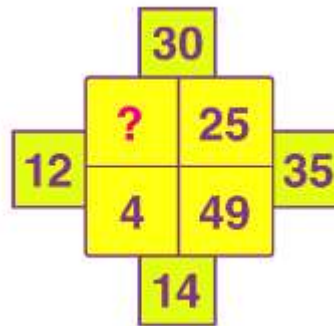
Accredited by NBA (B.E - CSE, EEE, ECE, Mech&B.Tech.IT)

COIMBATORE-641 035, TAMIL NADU




Unit 1-number systems

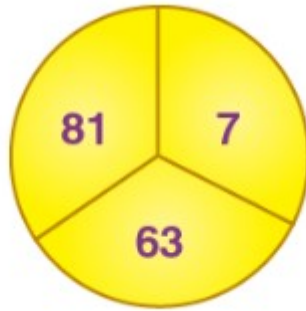
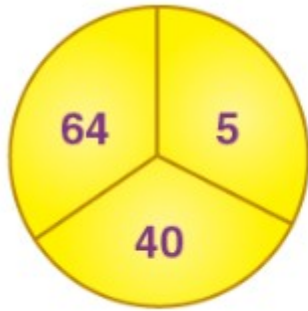
1. Solving Puzzles Which Involve Numbers And Letters



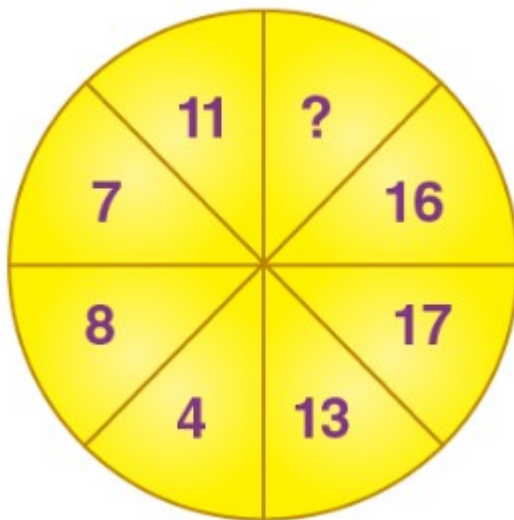
Puzzle 2: What is the missing number?



3. 3. Observe the following and find the missing value.



4. What is the missing number in the following puzzle?



5. Complete the following puzzle.

$$\begin{array}{r}
 \square + \square = 8 \\
 + \quad + \\
 \square - \square = 6 \\
 = \quad = \\
 13 \quad 8
 \end{array}$$